

MATHS

YEAR 3

NUMBER: NUMBER AND PLACE VALUE

**NC. Objective:** To compare and order numbers up to 1,000; identify and represent numbers using different representations; and read and write numbers up to 1,000 in numerals and words.

1. Hamlet's castle has:



843



672



659

- Write these numbers in order from smallest to greatest.
- Which number is the largest? Explain how you know.

2. Ophelia collected:



285



291

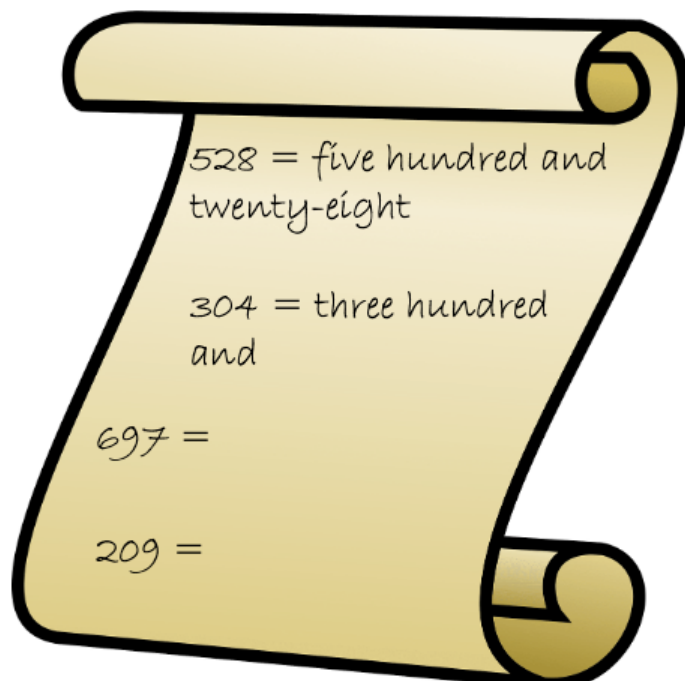


279

- Which number is greater: the number of flowers or the number of leaves?
- Order all three numbers from largest to smallest.

3. Horatio is writing numbers in words.

Help him finish.

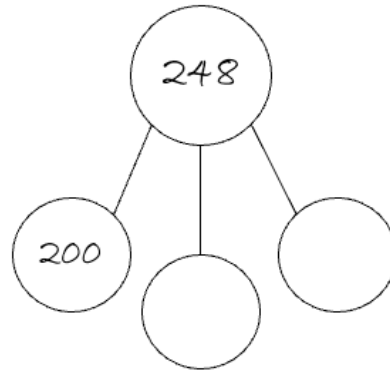
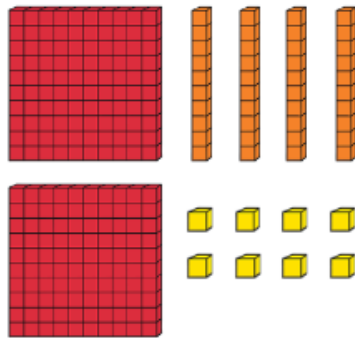


4. The castle has 742 steps in the main staircase. Write this number in:

- a) Numerals
- b) Words

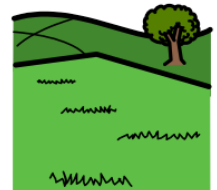


5. Hamlet counted 248 arrows in the castle armoury. Complete his partitioning to match the representation in base-ten.



6. Hamlet counted 362 soldiers on the battlefield.

- a) Write this number in words.
- b) Draw a picture to represent the number.



7. Use your knowledge of partitioning into hundreds, tens and ones to complete these part-whole models:

